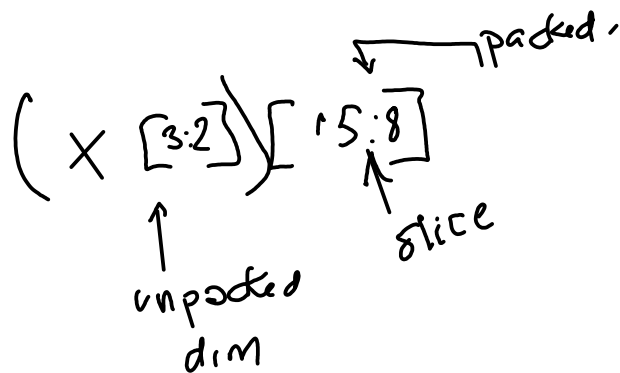


Line Codes

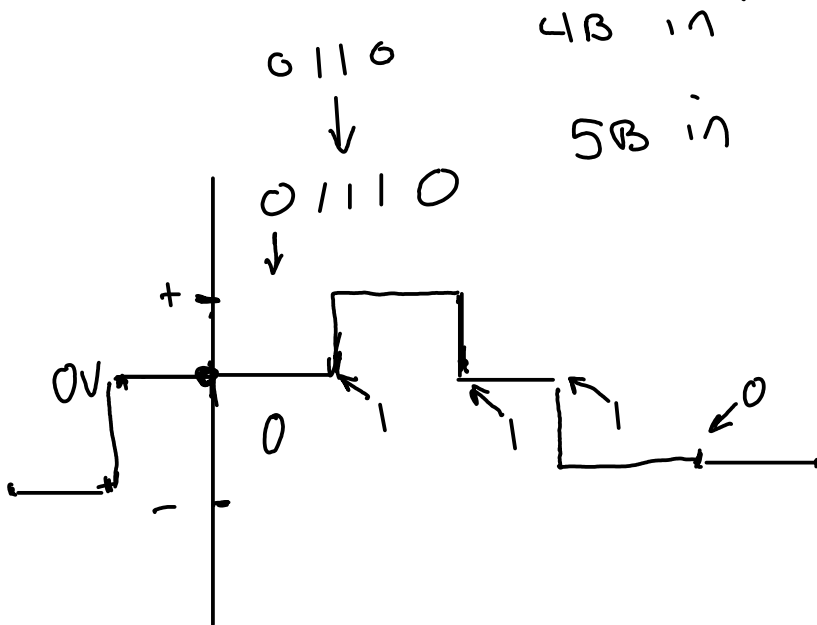
Exercise 1: Convert the sequence 0100 0000 0000 0100 to a BZS waveform assuming the previous mark was transmitted as a positive pulse.

$$\log_i < \overset{6}{\boxed{15:0}} \times \boxed{15:0}$$



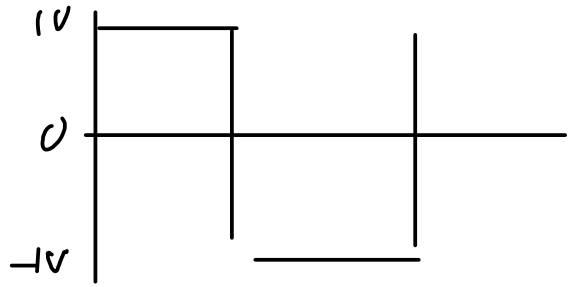
Exercise 2: How would the bit sequence 0110 be encoded using 4B5B followed by MLT3 assuming the starting level ~~0V~~ were $-1V$ and 0.

$-1V$ and 0.

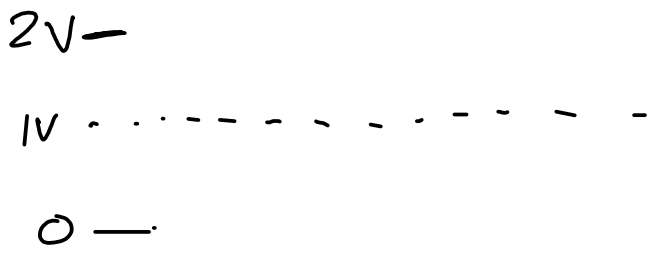


Exercise 3: What noise level is required to cause an error when using a bipolar line code with levels of ± 1 V? What are the voltage levels for a unipolar line code with the same noise margin? What are the RMS voltages of these two line codes when transmitting a dotting sequence (alternating 1's and 0's)? Why might you use unipolar line codes anyways?

need ± 1 V to cause error.

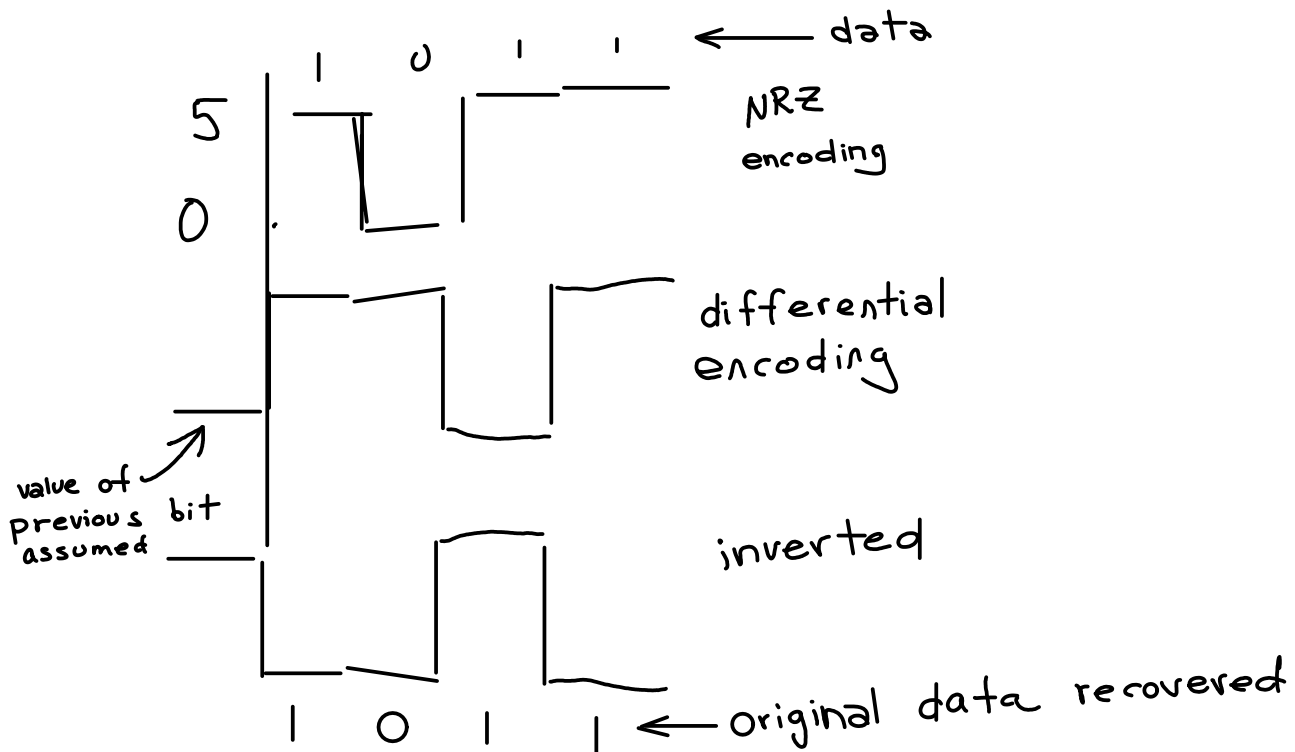


$$\frac{V^2}{R} = \frac{1^2}{1} \cdot \frac{1}{2} + \frac{(-1)^2}{1} \cdot \frac{1}{2} \rightarrow 1 \text{ W average power}$$

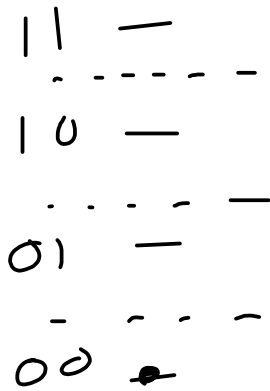


$$\begin{aligned} \frac{2^2}{1} \cdot \frac{1}{2} &= 2 \text{ W} \\ + \\ \frac{0^2}{1} \cdot \frac{1}{2} &= 0 \text{ W} \\ \hline &= 1 \text{ W} \end{aligned} \quad \begin{array}{l} 2 \text{ W} \\ \text{average} \\ \text{power} \end{array}$$

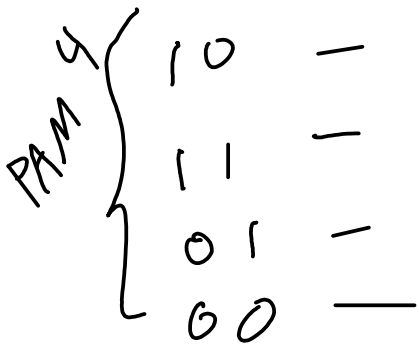
Exercise 4: Assume a 1 is transmitted as 5V and 0 as 0V. Draw the waveform for the bit sequence 1011. Draw the waveform if the bits are transmitted differentially with a 1 encoded as a change in level. Assume the initial value of the waveform is 0. Invert the waveform and decode it.



Exercise 5: Show the binary and Gray-coded encodings for PAM4. What is the average number of bits in error if the only errors are between adjacent levels?



TX	RY	bits error
00	→ 01	1
01	→ 00	1
	10	2
10	11	1
	01	2
11	10	1
<hr/>		8/6



00	→ 01	1
01	00	1
	11	1
11	01	1
	10	1
10	11	1
<hr/>		6/6

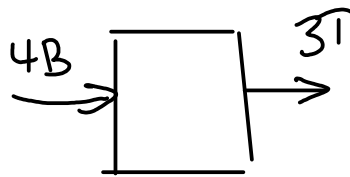
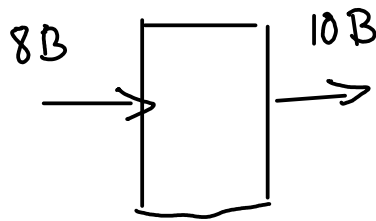
- 000
- 001
- 011
- 010
- 110
- 111

Exercise 6: How many combinations are there of 3 bits? Of 4 bits? How many bits might be input and output by an 8B10B code? What might a 4B3T code mean?

000
001
010
011
100
101
110
111

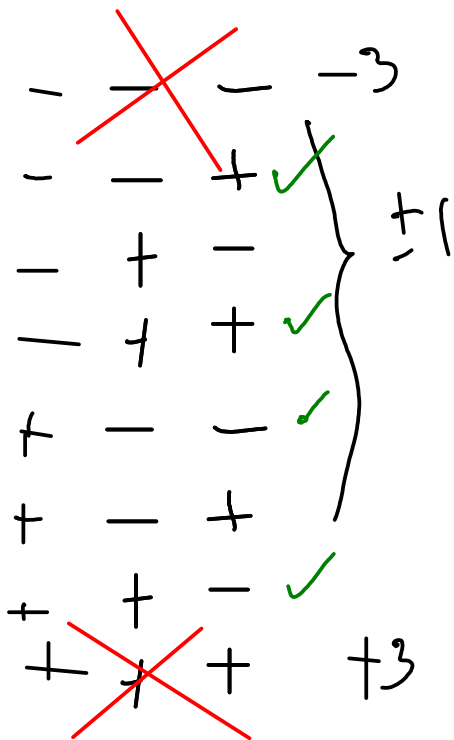
2^3 or 2^4

$2^4 = 16$



$3^3 = 27$

Exercise 7: Design your own 2B3B line code by choosing the output waveforms that have the lowest average DC value and giving preference to those that start and end at different levels (assume bipolar signalling).



0	0		-	-	+
0	1		-	+	+
1	0		+	-	-
1	1		+	+	-

Exercise 8: What (minimum) delay does a B8ZS encoder add? Receiver? Why is there a zero between successive same-polarity pulses?

To recognize 8 consecutive zeros need to "look ahead" at least 8 bits. This is the minimum delay.